


姓名: _____

数字 11-19 的分解组合 1




将十个圈起来。写数字。 Circle 10 things. Write the number.



_____ 十 _____ 和 _____



_____ 和 _____



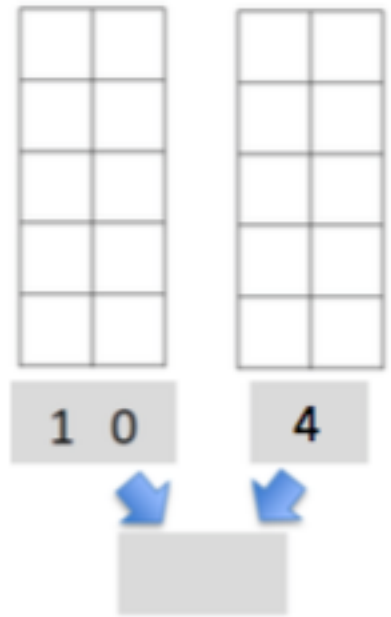
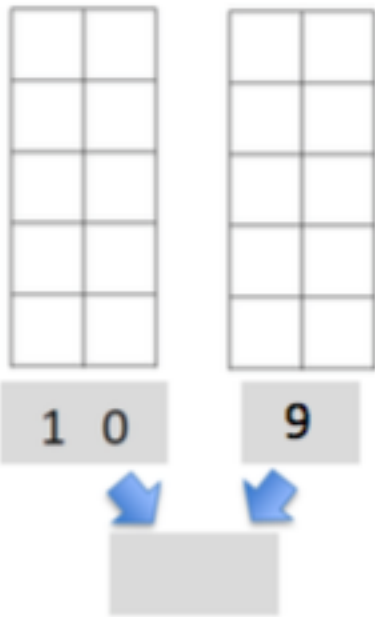
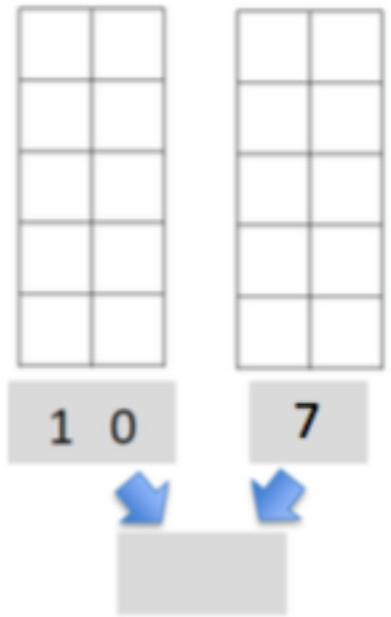
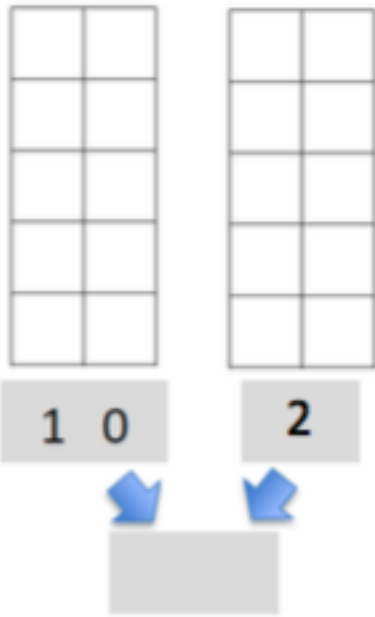
_____ 和 _____

_____ 和 _____

姓名: _____

数字 11-19 的分解组合 2

画一画，写一写数字 Write and draw the number.



姓名: _____

数字 11-19 的分解组合 3

Count and write how many the Say Ten way. 数一数, 写数字



十一是____和____



十五是____和____



十五是____和____



十七是____和____

姓名： _____

数字 11-19 的分解组合 4

数一数。在十格框内画上相同的数字

Count the objects. Draw dots to show the same number on the double 10-frames.

♥♥♥♥♥♥♥♥♥♥ ♥♥♥

⇒

●	●	●	●	●
●	●	●	●	●

●	●	●		

☀️☀️☀️☀️☀️☀️☀️☀️☀️☀️

☀️☀️☀️☀️☀️

⇒

😊😊😊😊

😊😊😊😊

😊😊😊😊

😊😊😊😊

😊😊😊😊

⇒

